






Resuelve las operaciones y escribe el resultado.






$$\begin{array}{r} 36 \\ + 42 \\ \hline \end{array}$$


$$\begin{array}{r} 57 \\ + 21 \\ \hline \end{array}$$



$$\begin{array}{r} 64 \\ + 15 \\ \hline \end{array}$$



$$\begin{array}{r} 83 \\ - 22 \\ \hline \end{array}$$


$$\begin{array}{r} 71 \\ - 38 \\ \hline \end{array}$$


$$\begin{array}{r} 92 \\ - 46 \\ \hline \end{array}$$



$$\begin{array}{r} 89 \\ - 27 \\ \hline \end{array}$$


$$\begin{array}{r} 74 \\ + 13 \\ \hline \end{array}$$


$$\begin{array}{r} 48 \\ + 31 \\ \hline \end{array}$$


$$\begin{array}{r} 63 \\ + 24 \\ \hline \end{array}$$


$$\begin{array}{r} 55 \\ - 20 \\ \hline \end{array}$$


$$\begin{array}{r} 87 \\ - 14 \\ \hline \end{array}$$




Dos cifras



Resuelve las operaciones y escribe el resultado.







$$\begin{array}{r} 24 \\ + 13 \\ \hline \end{array}$$




$$\begin{array}{r} 36 \\ + 21 \\ \hline \end{array}$$




$$\begin{array}{r} 45 \\ + 12 \\ \hline \end{array}$$




$$\begin{array}{r} 67 \\ - 34 \\ \hline \end{array}$$



$$\begin{array}{r} 58 \\ - 27 \\ \hline \end{array}$$



$$\begin{array}{r} 73 \\ - 42 \\ \hline \end{array}$$



$$\begin{array}{r} 83 \\ - 51 \\ \hline \end{array}$$



$$\begin{array}{r} 92 \\ - 60 \\ \hline \end{array}$$



$$\begin{array}{r} 41 \\ + 28 \\ \hline \end{array}$$



$$\begin{array}{r} 35 \\ + 44 \\ \hline \end{array}$$



$$\begin{array}{r} 56 \\ + 23 \\ \hline \end{array}$$




$$\begin{array}{r} 72 \\ + 16 \\ \hline \end{array}$$




Resuelve las operaciones y escribe el resultado.







$$\begin{array}{r} 24 \\ + 15 \\ \hline \end{array}$$




$$\begin{array}{r} 36 \\ + 42 \\ \hline \end{array}$$




$$\begin{array}{r} 57 \\ + 21 \\ \hline \end{array}$$




$$\begin{array}{r} 83 \\ - 31 \\ \hline \end{array}$$




$$\begin{array}{r} 68 \\ - 24 \\ \hline \end{array}$$




$$\begin{array}{r} 75 \\ - 12 \\ \hline \end{array}$$




$$\begin{array}{r} 91 \\ - 40 \\ \hline \end{array}$$



$$\begin{array}{r} 62 \\ + 17 \\ \hline \end{array}$$




$$\begin{array}{r} 43 \\ + 36 \\ \hline \end{array}$$



$$\begin{array}{r} 54 \\ + 23 \\ \hline \end{array}$$



$$\begin{array}{r} 66 \\ - 25 \\ \hline \end{array}$$




$$\begin{array}{r} 89 \\ - 38 \\ \hline \end{array}$$



Resuelve las operaciones y escribe el resultado.







$$\begin{array}{r} 27 \\ + 12 \\ \hline \end{array}$$




$$\begin{array}{r} 48 \\ + 31 \\ \hline \end{array}$$




$$\begin{array}{r} 63 \\ + 26 \\ \hline \end{array}$$




$$\begin{array}{r} 72 \\ - 21 \\ \hline \end{array}$$



$$\begin{array}{r} 55 \\ - 23 \\ \hline \end{array}$$




$$\begin{array}{r} 84 \\ - 42 \\ \hline \end{array}$$



$$\begin{array}{r} 69 \\ - 37 \\ \hline \end{array}$$



$$\begin{array}{r} 96 \\ - 15 \\ \hline \end{array}$$




$$\begin{array}{r} 34 \\ + 25 \\ \hline \end{array}$$



$$\begin{array}{r} 67 \\ + 22 \\ \hline \end{array}$$



$$\begin{array}{r} 78 \\ - 34 \\ \hline \end{array}$$



$$\begin{array}{r} 91 \\ + 8 \\ \hline \end{array}$$



Resuelve las operaciones y escribe el resultado.





$$\begin{array}{r} 23 \\ + 14 \\ \hline \end{array}$$




$$\begin{array}{r} 45 \\ + 32 \\ \hline \end{array}$$



$$\begin{array}{r} 52 \\ + 27 \\ \hline \end{array}$$



$$\begin{array}{r} 74 \\ - 22 \\ \hline \end{array}$$




$$\begin{array}{r} 67 \\ - 34 \\ \hline \end{array}$$




$$\begin{array}{r} 86 \\ - 45 \\ \hline \end{array}$$



$$\begin{array}{r} 93 \\ - 51 \\ \hline \end{array}$$



$$\begin{array}{r} 81 \\ - 28 \\ \hline \end{array}$$




$$\begin{array}{r} 36 \\ + 41 \\ \hline \end{array}$$



$$\begin{array}{r} 59 \\ + 30 \\ \hline \end{array}$$



$$\begin{array}{r} 47 \\ + 22 \\ \hline \end{array}$$



$$\begin{array}{r} 68 \\ - 16 \\ \hline \end{array}$$

